



INDIAN SCHOOL AL WADI AL KABIR

DEPARTMENT OF MATHEMATICS (2023 – 2024)

TOPIC: MATHEMATICS

REVISION WORKSHEET


RESOURCE PERSON: ANEESA SIKANDER

NAME: _____ CLASS: II SEC: _____ DATE: _____


Q1. Insert the missing numbers.

	BEFORE	BETWEEN	AFTER
a)	108	_____	_____
b)	_____	136	_____
c)	_____	179	_____
d)	_____	_____	200

Q2. Jim wants to buy the biggest bag of toffees for his birthday. Circle the packet with the greatest number of toffees.



Q3. Tick the book with the least number of pages.



Q4. Write the numerals for the given number names.

a) One hundred twelve - _____

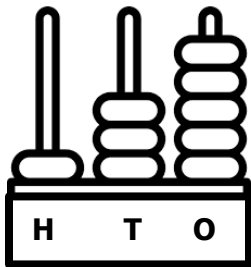
b) One hundred five - _____

Q5. Write the number names for the numbers given below.

a) 132 - _____

b) 144 - _____

Q6. Observe the abacus and answer the questions that follow.



a) The number shown on the abacus is _____.

b) Expand the above number in both ways.

$$\begin{aligned} \text{_____} &= \text{_____} + \text{_____} + \text{_____} \\ &= \text{_____} + \text{_____} + \text{_____} \end{aligned}$$

c) The number that comes before the above formed number is _____.

Q7. State the place and place value.

